

Math Unit 5 Test Review Sheet

Date of Test _____

Name _____

If you understand everything on this review guide, then you are ready for our test. If you are still unsure of any problems, have Mom or Dad make up more problems to practice.

1. Write a fact family.



2. Fill in the counts.

3,496; 3,497; _____ ; _____ ; _____


3. Write the numbers in order from least to greatest.

756 320 1,854 331

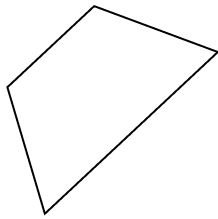
over 

4. Draw 2 line segments using your straightedge.

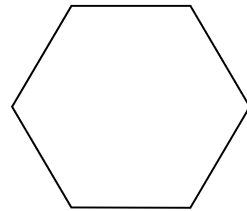
(Use any letters you would like)

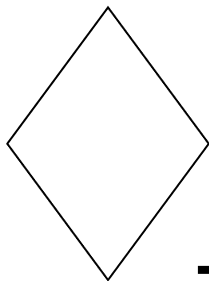


5. Name these shapes:









Word Bank:

hexagon

rhombus

rectangle

Triangle

square

trapezoid