

Math Unit 12 Test Review Sheet

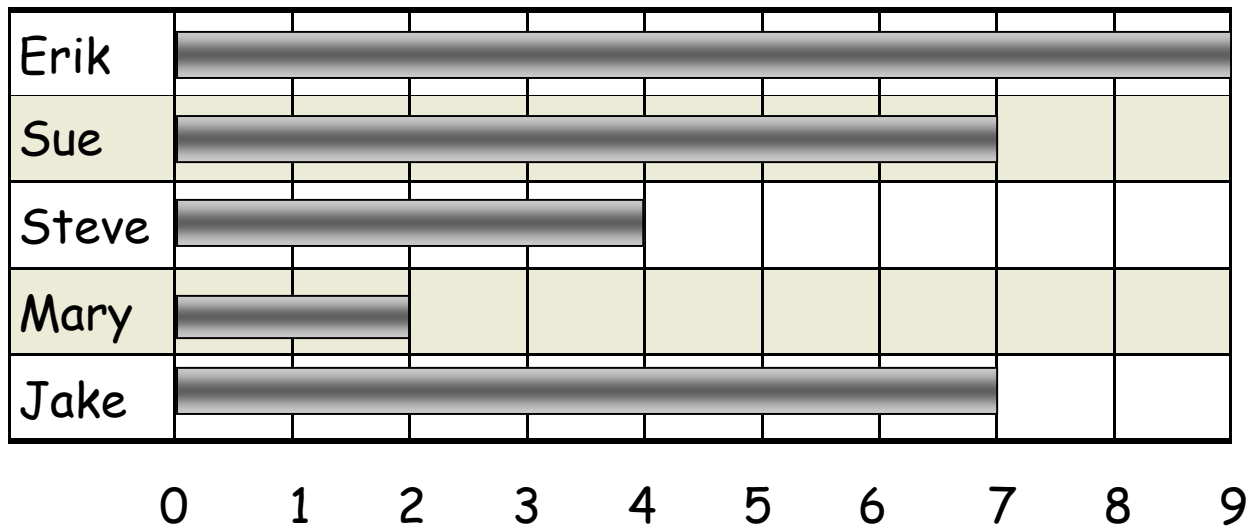
Date of Test _____

Name _____

If you understand everything on this review guide, then you are ready for our test. If you are still unsure of any problems, have Mom or Dad make up more problems to practice.

Use this graph to answer the questions below.

Number of Books Read This Week



1. What is the minimum (fewest) number of books read? _____
2. What is the maximum (greatest) number of books read? _____
3. What is the median (middle) number of books read? _____
4. What is the mode (the number that occurs the most often)?

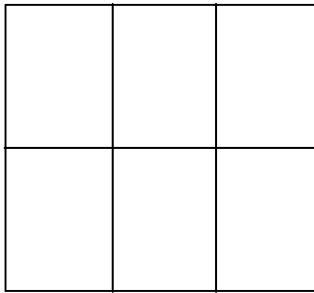
5. Who read fewer books than Steve? _____
6. Who read more books than Jake? _____

7. Use coins to help you. You have \$1.00. You spend \$0.27. How much change do you get? _____

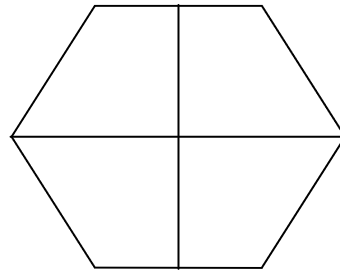
8. Fill in the blanks:

There are _____ minutes in an hour,
_____ hours in a day,
_____ days in a week,
_____ months in a year.

9. Shade $\frac{1}{2}$ of each shape and write the fraction:



$\frac{1}{2}$ or _____



$\frac{1}{2}$ or _____

10. Write the numbers in order from smallest to largest.

6,489, 6,739, 6,421, 6,891, 6,867
